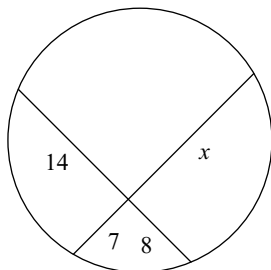


Assignment

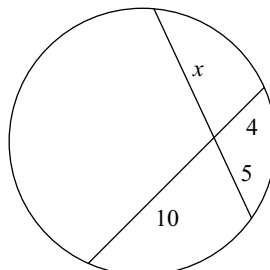
Date _____ Period _____

Solve for x . Assume that lines which appear tangent are tangent.

1)

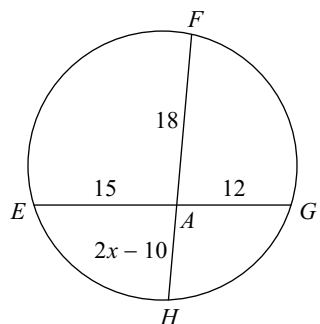


2)



Find the measure of the line segment indicated. Assume that lines which appear tangent are tangent.

3) Find AH



4) Find FD

